



education

Department:
Education
REPUBLIC OF SOUTH AFRICA

**ANNUAL NATIONAL
ASSESSMENTS**

**GRADE 4
2008**

ENGLISH

MATHEMATICS

02


PROVINCE											
DISTRICT / REGION											
SCHOOL											
EMIS NO.											
LEARNER SURNAME											
LEARNER NAMES											
DATE OF BIRTH	Year					Month			Day		

Instructions to learners

1. You have 60 minutes to answer all the questions.
2. In some questions you have to draw a circle around the letter of the correct answer. These questions have only one correct answer.
3. In some questions you have to write or fill in the correct answer.
4. All questions should be answered in the spaces provided in this book.

Key to picture



The  picture has been used throughout this task to show you **where** you must **write your answer**.

1. Fill in the missing number.

4 100; 4 125; 4 150; 4 175;



2. Write down the value of the underlined digit.

3 503



3. Write in the missing values.

9 235 = (9 x 1 000) + (2 x _____) + (3 x ___) + (5 x 1)




4. Add:

 1 4 7
+ 6 8 9



5. Subtract:

$$\begin{array}{r} 832 \\ - 98 \\ \hline \\ \hline \end{array}$$


6. Draw a circle around the letter of the correct answer.

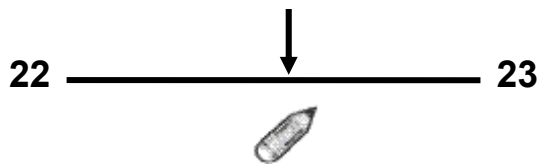
Which fraction below is equal to $\frac{3}{4}$?

- a. $\frac{8}{12}$
- b. $\frac{14}{16}$
- c. $\frac{6}{8}$
- d. $\frac{6}{9}$

7. Write the missing fraction.

$$\frac{5}{10}; \quad \frac{7}{14}; \quad \frac{9}{18}; \quad \frac{11}{22}; \quad \text{---}; \quad \frac{15}{30}$$

8. Write the decimal number that is halfway between 22 and 23.



9. Draw a circle around the letter of the correct answer.



The stick is 25 cm long.

Estimate the length of the nail.

- a. 5,5 cm
- b. 15,5 cm
- c. 2.5 cm
- d. 1 cm

10. Five girls weigh themselves.



Amina
48,5 kg



Neo
49,5 kg



Lin
47,5 kg



Sindy
48 kg



Cherry
49 kg

How much does the heaviest girl weigh?

 _____ kg

13. Marcel pays R19 for 1 pen and 3 exam pads.
An exam pad costs R5.

How much does the pen cost?

R _____



Work space

14. Pumzile drinks $2\frac{1}{2}$ mugs of water every day.

How many mugs of water does she drink in 6 days?



_____ mugs of water

Work space

15. Draw a circle around the letter of the correct answer.

$$456 \times 5 = 450 + 450 + 450 + 450 + 450 + \square$$

- a. 50
- b. 30
- c. 450
- d. 45

16. Draw a circle around the letter of the correct answer.


Which numbers below mean the same as $5 \times (6 + 2)$?

- a. $(5 \times 6) + 2$
- b. $(5 \times 2) + 6$
- c. $(6 + 2) \times 5$
- d. $(5 + 2) \times 6$


17. Complete the table. Fill in the months.


1 year = 12 months

Number of years	1	2	3	30
Number of months	12	24		





18. Complete this number sentence.

$$242 - \underline{\hspace{2cm}} = 21$$




19. Complete this number sentence.

$$\underline{\hspace{2cm}} \div 25 = 4$$




20. Draw a circle around the letter of the correct answer.

What is the 12th shape in this pattern?

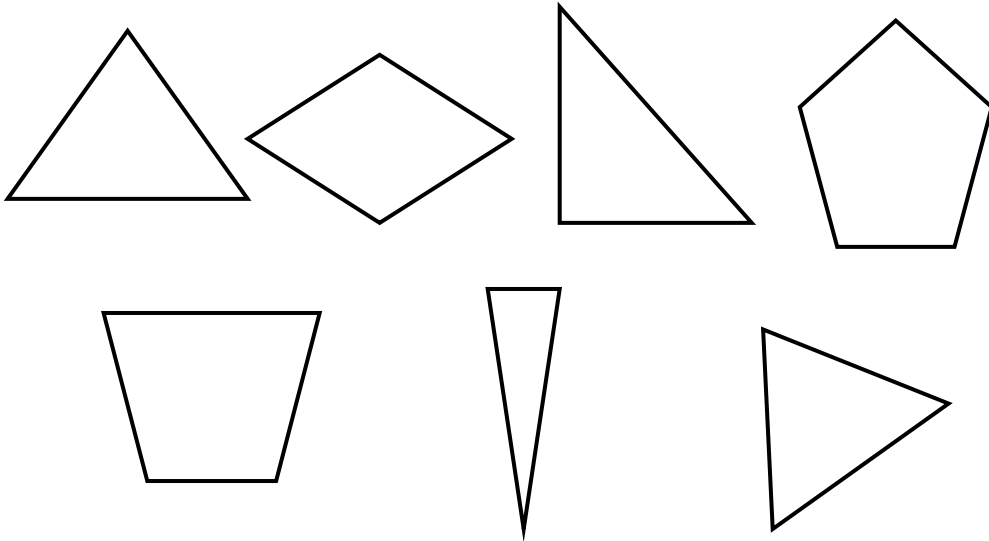


a. 

b. 

c. 

21. In this group of shapes, how many are triangles?

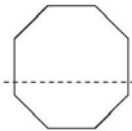


 _____ triangles

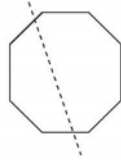
22. Draw a circle around the letter of the correct answer.

Which shape below has a line of symmetry?

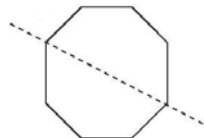
a.



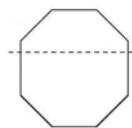
b.




c.




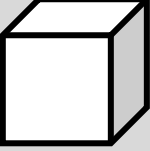
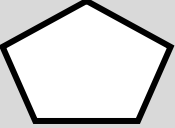

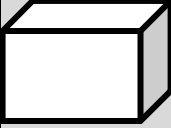
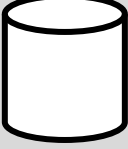






d.



23.

In this grid the  is in C1.

1				
2				
3				
	A	B	C	D

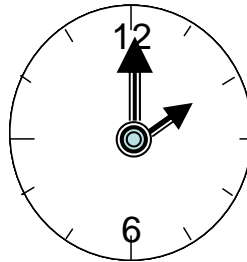
Write the letter and the number to indicate where the



is.



24. Use the watch below to answer the question:




Write the time shown on the clock as a 24-hour clock time.



25. Your school starts at 08:00 in the morning and ends at 13:30.
How much time are you spending at school per day?





26. Poppy buys a 2 ℓ bottle of milk.

She uses 500 ml of milk to bake a cake.

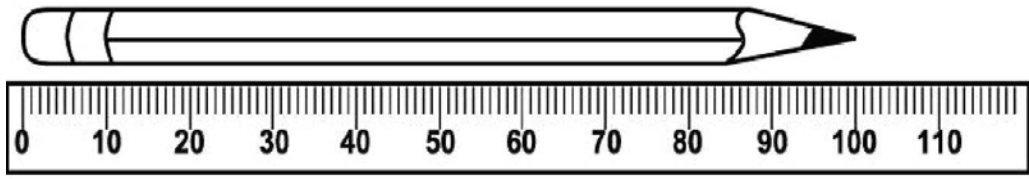
How much milk is left in the bottle?



_____ ml



27. What is the length of the pencil in mm?



 _____ mm

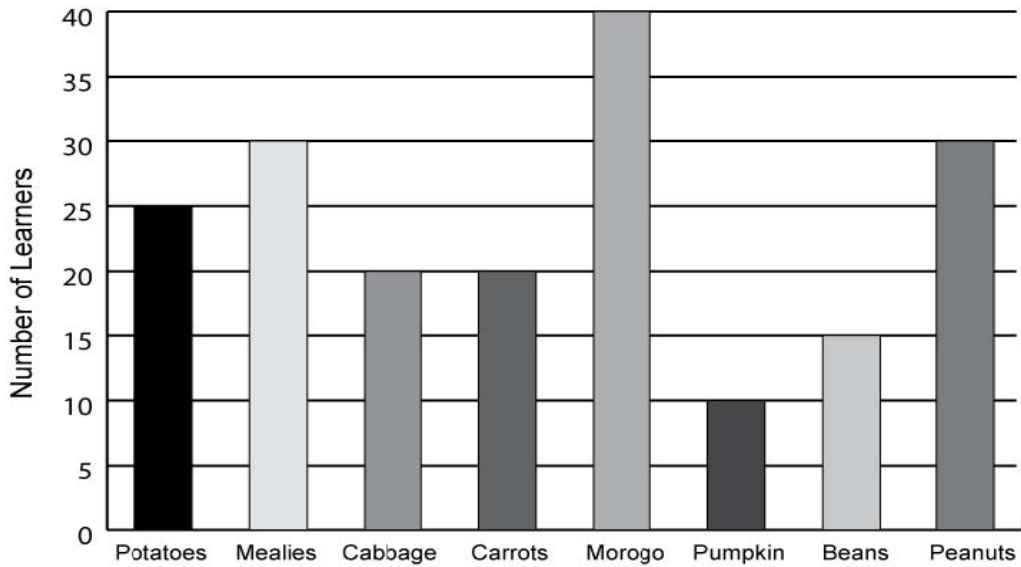
28. Mrs. Patel keeps a record to show how many textbooks she gets.

Month	Tallies	Frequency
January		25
February		31



Draw tallies in the chart to show how many she got in February.

29. The clinic did a survey to find out which foods learners like best. Answer the questions below.



29.1 How many learners like mealies?



_____ learners

29.2 Which food is liked just as much as mealies?



29.3 Which food did they like the most?



30. *Draw a circle around the letter of the correct answer.*

In the bag there are:

- **3 yellow balls**
- **2 red balls**
- **3 pink balls**
- **4 blue balls**



You close your eyes and take one ball out of the bag.

Which colour ball has the least chance to be picked out of the bag?

- a. **Yellow**
- b. **Red**
- c. **Pink**
- d. **Blue**

End of task!
Thank you